

End of Year Examination Revision Worksheet

Grade 2 – Mathematics

Name: _____ Section: _____ Date: _____

Unit 8: Time

Q1. Write these times in words.

a. 08: 15 _____

b. 06: 05 _____

c. 11: 47 _____

Q2. Write these times in digital form.

a. twenty to five: _____

c. five to eight: _____


b. quarter past twelve: _____

d. twenty past seven: _____

Q3. Write on the digital clock to match the time on the analogue clock.



Q4. Write the correct time in words under each clock.



Unit 9: More addition and subtraction

Q1. Solve.

a. $901 - 661$

c. $952 - 208$

b. $284 + 477$

d. $153 + 257$

Q2. Fill in the missing numbers.

a. $55 + \underline{\quad} = 100$

e. $290 + \underline{\quad} = 1000$

b. $83 + \underline{\quad} = 100$

f. $350 + \underline{\quad} = 1000$

c. $59 + \underline{\quad} = 100$

g. $625 + \underline{\quad} = 1000$

d. $47 + \underline{\quad} = 100$

h. $410 + \underline{\quad} = 1000$

Q3. Use complements of 100 to help you solve these problems.

a. Ali collected 65 stickers. He wants to have 100 stickers.

How many more stickers does he need?

Answer: _____

b. A jar can hold 100 marbles. There are already 78 marbles in it.

How many more marbles are needed to fill the jar?

Answer: _____

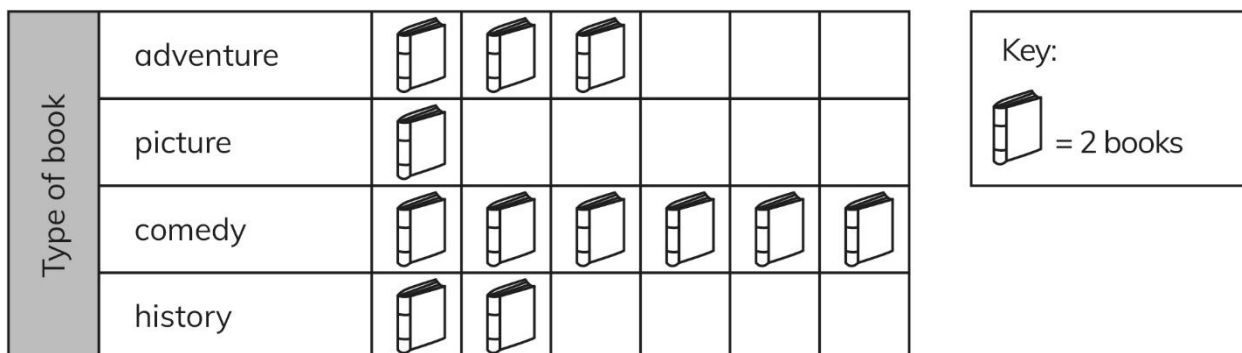
c. A water tank can hold 100 liters. It already has 73 liters.

How many more liters are needed to fill it?

Answer: _____

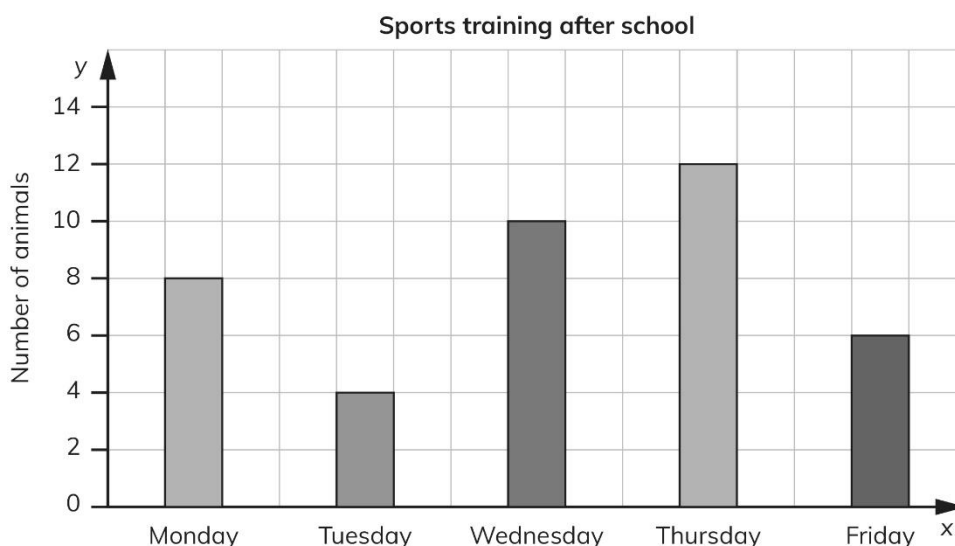
Unit 10: Graphs

Q1. Look at this pictogram from a library.



- a. Write the title for the pictogram. _____
- b. How many adventure books were borrowed last week? _____
- c. How many books were borrowed altogether last week? _____
- d. Which type of books was borrowed the least? _____
- e. Which type of books were borrowed the most? _____
- f. How many history books were borrowed from the library? _____

Q2. The bar chart shows how many children went to sports training after school.



- a. Which day is the most popular? _____
- b. Which day is the least popular? _____
- c. What is the difference between the number of children doing sports training on Monday and Thursday? _____

Q3. Put the following numbers into the correct place on the Carroll diagram.

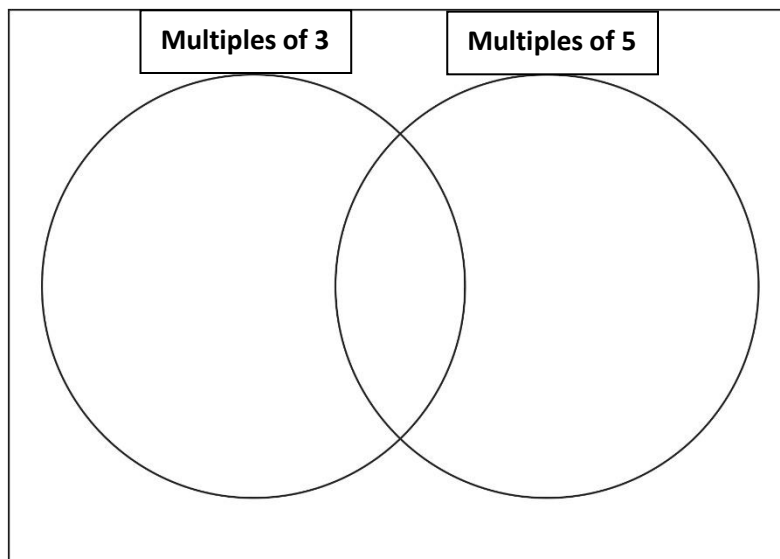
Cross out the numbers as you use them.

3, 5, 6, 9, 10, 12, 15, 18, 20, 21, 24, 25, 27, 30

	Multiples of 3	Multiples of 5
Even numbers		
Odd numbers		

Q4. Sort the numbers into the Venn diagram.

3, 5, 6, 9, 10, 12, 15, 18, 20, 21, 24, 25, 27, 30



Unit 11: Revisiting multiplication and division

Q1. Complete each sequence. What is the term- to- term rule for each sequence?

a. 6, 9, 12, 15, _____, _____, _____

The term- to- term rule is _____.

b. 39, 35, 31, 27, _____, _____, _____

The term- to- term rule is _____.

Q2. Multiply each set of three numbers in any order to simplify the calculation and find the product.

a. $3 \times 3 \times 5$ _____

c. $5 \times 6 \times 3$ _____

b. $8 \times 2 \times 4$ _____

d. $5 \times 4 \times 6$ _____

Q3. Find the product using grid method.

a. 15×4

c. 13×5

b. 19×2

d. 18×3

Q4. Find the product using column method.

a. 79×3

c. 26×4

b. 45×2

d. 42×5

Q5. Divide and include any remainders.

a. $10 \div 3 =$ _____

e. $52 \div 3 =$ _____

c. $17 \div 5 =$ _____

g. $37 \div 5 =$ _____

d. $86 \div 4 =$ _____

h. $18 \div 2 =$ _____

Q6. 15 biscuits are shared among 6 children.

How many does each child get? How many are left?

Q7. 32 chocolates are packed into boxes of 5.

How many full boxes can be made? How many chocolates are left?

Q8. 41 cupcakes are packed into boxes of 8.

How many boxes are needed to pack all the cupcakes?

Unit 14: Time (2)

Use the calendar to find the answers.

2026						
April						
Sun	Mon	Tue	Wed	Thu	Fri	Sat
			1	2	3	4
5	6	7	8	9	10	11
12	13	14	15	16	17	18
19	20	21	22	23	24	25
26	27	28	29	30		

- a. How many days are there from 1st April to 7th April?

Answer: _____

- b. If today is 15th April, what date will it be after 3 days?

Answer: _____

- c. What is the date of the last Friday in April 2026?

Answer: _____

- d. Sara's birthday is on 24th April. What day of the week is her birthday?

Answer: _____

- e. If today is 8th April, what date will it be after 5 days?

Answer: _____

- f. How many days are there from 12th April to 20th April?

Answer: _____